

INTERNATIONAL INDIAN SCHOOL RIYADH



MID TERM
REVISION WORK SHEET 2016-2017
Class: - I
SUBJECT: MATHEMATICS.

i. Write the number names.

219	
225	
237	
304	
345	
255	
279	
353	
360	
282	
365	
375	
394	
400	
396	

ii. Fill in the blanks.

$4 \times 1 =$			$4 \times 4 =$	
$4 \times 5 =$			$5 \times 9 =$	
$5 \times 2 =$			$5 \times 7 =$	
$5 \times 9 =$			$4 \times 2 =$	
$4 \times 3 =$			$4 \times 0 =$	
$4 \times 9 =$			$5 \times 8 =$	
$5 \times 0 =$			$5 \times 3 =$	
$4 \times 8 =$			$4 \times 7 =$	
$5 \times 1 =$			$5 \times 7 =$	
$5 \times 6 =$			$5 \times 5 =$	

iii. Ring the greatest number.

a) 19, 12, 13, 18

b) 2, 17, 12, 7

c) 8, 48, 75, 23

d) 44, 55, 77, 88

e) 60, 40, 20, 90

f) 31, 43, 19, 10

g) 56, 82, 75, 15

h) 48, 78, 98, 28

i) 24, 8, 14, 92

j) 44, 23, 31, 99

iv. Write in increasing order:

a) 12 52 96 33

Ans _____, _____, _____, _____

b) 60 90 10 40

Ans _____, _____, _____, _____

c) 75 74 63 98

Ans _____, _____, _____, _____

d) 38 56 25 21

Ans _____, _____, _____, _____

e) 15 18 20 12

Ans _____, _____, _____, _____

f) 89 66 63 15

Ans _____, _____, _____, _____

g) 32 19 90 37

Ans _____, _____, _____, _____

h) 65 94 56 25

Ans _____, _____, _____, _____

v. Write numerals:-

a) 3 tens + 6 ones = _____

b) 4 tens + 2 ones = _____

c) 6 tens + 7 ones = _____

d) 2 tens + 5 ones = _____

e) 1 tens + 2 ones = _____

f) 3 tens + 0 ones = _____

g) 8 tens + 2 ones = _____

h) 7 tens + 9 ones = _____

i) 5 tens + 9 ones = _____

j) 9 tens + 9 ones = _____

vi. Write tens and ones:-

$$12 = \underline{\quad} \text{ tens} + \underline{\quad} \text{ ones}$$

$$40 = \underline{\quad} \text{ tens} + \underline{\quad} \text{ ones}$$

$$25 = \underline{\quad} \text{ tens} + \underline{\quad} \text{ ones}$$

$$66 = \underline{\quad} \text{ tens} + \underline{\quad} \text{ ones}$$

$$78 = \underline{\quad} \text{ tens} + \underline{\quad} \text{ ones}$$

$$51 = \underline{\quad} \text{ tens} + \underline{\quad} \text{ ones}$$

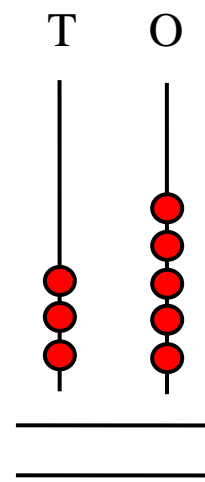
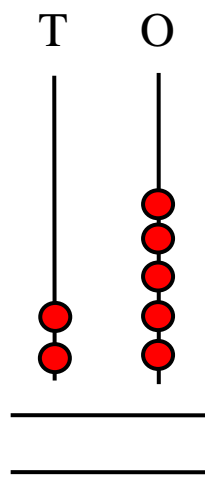
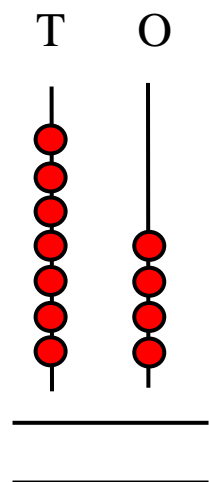
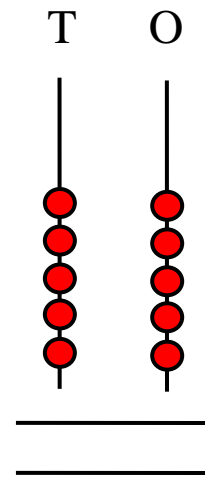
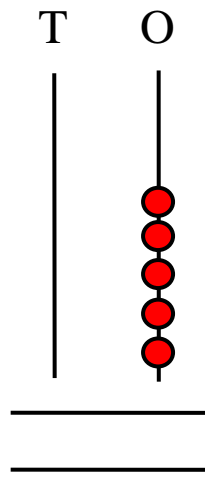
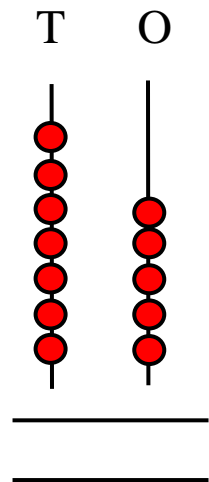
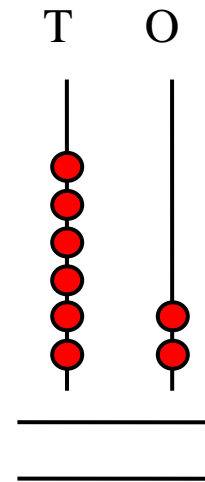
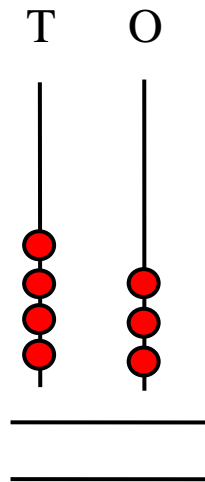
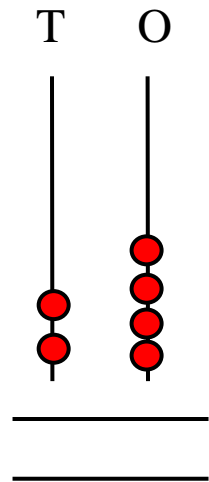
$$35 = \underline{\quad} \text{ tens} + \underline{\quad} \text{ ones}$$

$$99 = \underline{\quad} \text{ tens} + \underline{\quad} \text{ ones}$$

$$98 = \underline{\quad} \text{ tens} + \underline{\quad} \text{ ones}$$

$$65 = \underline{\quad} \text{ tens} + \underline{\quad} \text{ ones}$$

vii. Count on the abacus and write numerals:-



viii. Add the following:-

3 2	4 1	5 5	1 8	6 0
+2 2	+2 5	+2 1	+1 1	+2 2
_____	_____	_____	_____	_____
_____	_____	_____	_____	_____

7 5	8 2	6 3	8 5	5 4
+ 3	+0 5	+2 0	+1 3	+4 2
_____	_____	_____	_____	_____
_____	_____	_____	_____	_____

ix. Fill in the blanks:-

a) $20 + 20 =$

f) $80 + 10 =$

b) $60 + 30 =$

g) $30 + 20 =$

c) $40 + 20 =$

h) $50 + 40 =$

d) $70 + 10 =$

i) $10 + 10 =$

e) $50 + 10 =$

j) $40 + 10 =$

x. Story sums:-

Working

a) Mother gave 18 sweets to Rita and father gave 10 sweets. How many sweets have in all?

Ans: - _____sweets.

b) 15 boys and 20 girls are there in class I-A. How many students are there in all?

Ans:- _____students.

Working

c) Ishaan has 23 stamps and kuldeep has 35. How many stamps do They have together?

Ans:- _____stamps.

Working

d) There are 32 pink flowers and 65 yellow flowers are in a garden. How many flowers are there in all?

Ans:- _____flowers.

Working

Good luck